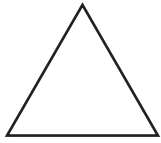
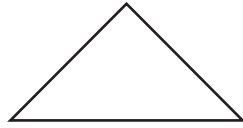


# Triangles



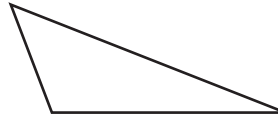
**Equilateral triangle**

All sides are the same length.



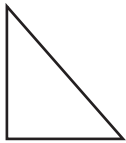
**Isosceles triangle**

At least two sides are the same length.



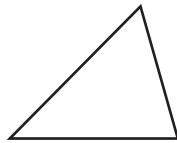
**Scalene triangle**

No sides are the same length.



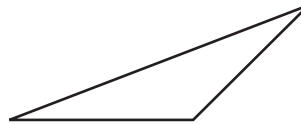
**Right triangle**

One angle is a right angle.



**Acute triangle**

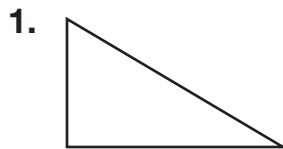
All three angles are acute angles.



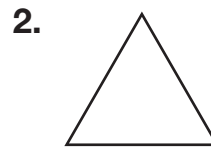
**Obtuse triangle**

One angle is an obtuse angle.

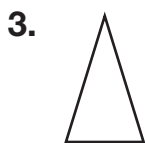
Classify each triangle by its sides and then by its angles.



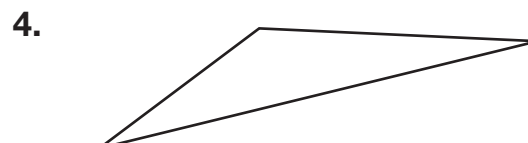
\_\_\_\_\_



\_\_\_\_\_



\_\_\_\_\_



\_\_\_\_\_